

Name:

3D shapes

AC 1.2

Using the following:

Cube **Cuboid** **Cylinder** **Sphere**
Triangular Prism **Pyramid**

write the correct name of each shape in the space provided.

You may use each name **more than once**.

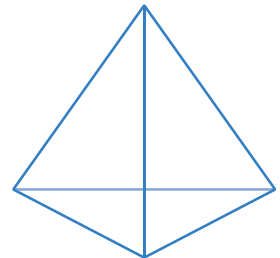
a)



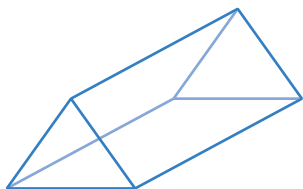
b)



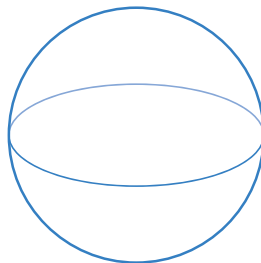
c)



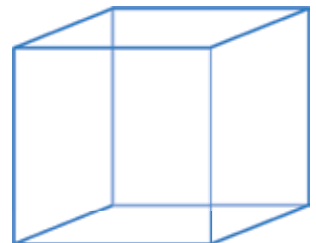
d)



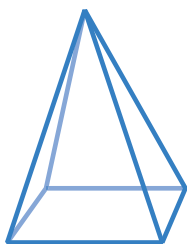
e)




f)



g)



h)



i)

